

ESCOLA: _____



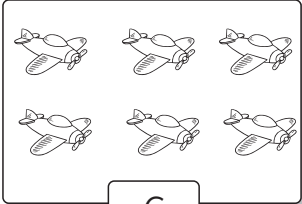
NOME: _____




PROFESSOR: _____ DATA: ___/___/___






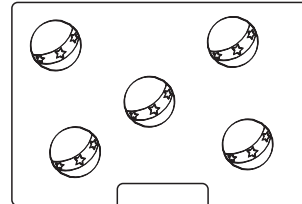

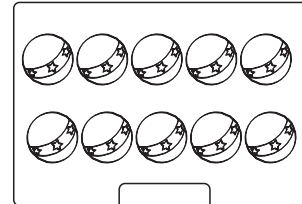
MULTIPLICAÇÃO DE NÚMEROS NATURAIS

1 - Observe as operações de soma e multiplicação. Depois, resolva as operações como o modelo.

 3	+	 3	=	 6	<div data-bbox="1238 763 1493 887" style="border: 1px solid black; padding: 5px; display: inline-block;">$3 \times 2 = 6$</div>
--	---	--	---	---	--

 <input type="text"/>	+	 <input type="text"/>	=	 <input type="text"/>	<div data-bbox="1238 1090 1493 1214" style="border: 1px solid black; width: 160px; height: 55px;"></div>
---	---	---	---	--	--

 <input type="text"/>	+	 <input type="text"/>	=	 <input type="text"/>	<div data-bbox="1238 1464 1493 1588" style="border: 1px solid black; width: 160px; height: 55px;"></div>
---	---	---	---	--	--

 <input type="text"/>	+	 <input type="text"/>	=	 <input type="text"/>	<div data-bbox="1238 1830 1493 1953" style="border: 1px solid black; width: 160px; height: 55px;"></div>
---	---	---	---	--	--